

Total Questions : 35

Time : 1 hr.

Guidelines for the Candidate

1. You will get additional ten minutes to fill up information about yourself on the OMR Sheet, before the start of the exam.
2. Write your **Name, School Code, Class, Section, Roll No.** and **Mobile Number** clearly on the **OMR Sheet** and do not forget to sign it. We will share your marks / result and other information related to SOF exams on your mobile number.
3. The Question Paper comprises four sections:
General Awareness (20 Questions), **Current Affairs** (5 Questions), **Life Skills** (5 Questions) and **Achievers Section** (5 Questions).
Each question in Achievers Section carries 2 marks, whereas all other questions carry 1 mark each.
4. All questions are compulsory. There is no negative marking. Use of calculator is not permitted.
5. There is only ONE correct answer. Choose only ONE option for an answer.
6. To mark your choice of answers by darkening the circles on the OMR Sheet, use **HB Pencil** or **Blue / Black ball point pen** only.
E.g.

Q.10 : What would you keep in an aquarium?

- A. Cats B. Dogs C. Fish D. Cows

As the correct answer is option C, you must darken the circle corresponding to option C on the OMR Sheet.

10. (A) (B) ● (D)

7. Rough work should be done in the blank space provided in this booklet.
8. Return the OMR Sheet to the invigilator at the end of the exam.
9. Please fill in your personal details in the space provided before attempting the paper.



DO NOT OPEN THIS BOOKLET UNTIL ASKED TO DO SO

Name:.....

SOF Olympiad Roll No.:..... Contact No.:.....

1 Which of the following is a plant product?



2 Which of the following is a popular French dish?



3 Rearrange the letters of the word 'Lamp' to make a new meaningful word.

A. Lame

B. Palm

C. Plan

D. Main

4 A huge mass of snow that suddenly breaks loose and crashes down a mountain is called a/an _____.

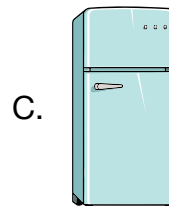

A. Isthmus

B. Avalanche

C. Oasis

D. Peninsula

5 Which of these machines is used to make fruit smoothie?



6 On this festival, children decorate eggs, participate in egg hunts and enjoy special meals. Which festival is this?

A. Christmas

B. Good Friday

C. Easter

D. Halloween Day

7 Which is the fourth planet from the Sun in our Solar System?

A. Mars

B. Jupiter

C. Earth

D. Venus

8 Which of the following is a small still water body?

A. River

B. Ocean

C. Pond

D. Sea

9 Which of the following plants is a creeper?

- A.  B.  C.  D. All of these

10 On a hot summer day, which among the following drinks will keep you cool?

- A.  Hot chocolate B.  Chicken soup C.  Coconut water D.  Tea




11 Which of the following is the flag of Australia?

- A.  B.  C.  D. 

12 How many pairs of legs does a cockroach have?

- A. 6 B. 4 C. 3 D. 2

13 Identify the road sign for 'No Stopping'.

- A.  B.  C.  D. None of these

14 Alisha has six jars of candies. If there are 3 candies in each jar, then how many candies does she have in all?




- A. 12 B. 18 C. 15 D. 20

15 The couple shown in the given picture is wearing the traditional dress of which Indian state?


- A. Manipur
B. West Bengal
C. Uttar Pradesh
D. Tamil Nadu



16 Who among the following would you call to fix the leaking pipes and taps in your house?



17 Which of these animals lives in a stable?



18 Which demon king was defeated by Lord Rama in 'Ramayana'?

A. Duryodhana

B. Yudhishtira

C. Ravana

D. Vibhishana

19 Identify the following.

- It is a device that is used to control characters or objects in video games.
- It consists of a stick that you can move in different directions.



D. Both A and C

20 Identify the famous athlete shown in the given picture.

- A. P.T. Usha
B. Mary Kom
C. Sania Mirza
D. P.V. Sindhu



CURRENT AFFAIRS

21 Where was the 'Mahakumbh Mela' held in 2025 in India?

- A. Haridwar
C. Varanasi

- B. Prayagraj
D. Ayodhya

22 Who is the current Chief Minister of Maharashtra?

A.



Devendra
Fadnavis

B.



Bhupendra Patel

C.



Yogi Adityanath

D. None of these

23 When is World Diabetes Day celebrated?

A. 14th November

B. 16th May

C. 17th June

D. 16th June

24 Who is the current President of USA?

A.



Donald Trump

B.



Mark Carney

C.



Anthony Albanese

D. None of these

25 Which of the following motifs would you find on the reverse of ₹ 200 Indian currency banknote?

A. Sun Temple

B. Ellora Caves

C. Sanchi Stupa

D. Mangalyaan

LIFE SKILLS

26 Which of the following is NOT a good table manner?

A. Using napkin to wipe your mouth

B. Talking while your mouth is full

C. Chewing with your mouth closed

D. Saying 'please' and 'excuse me' when asking for something across the table

27 You accidentally break an expensive plate at home. What should you do?

A. Hide it and do not let anyone know about this

B. Blame someone else

C. Tell the truth and apologise for it

D. None of these

28 We should always eat our food slowly and chew properly to _____.

- A. Finish food quickly
- B. Enjoy the taste of food and for good digestion
- C. Make talking possible while eating
- D. Swallow big pieces

29 What should you do with books and pencils borrowed from your friend?

- A. Throw them on the floor.
- B. Return them after use.
- C. Hide them in your desk so that no one else can use.
- D. Tear them or break them as they are yours.

30 There are several ways by which we can show our love to our family. Which of the following is **NOT** a correct way?

- A. We should wish them by saying 'Good Morning' and 'Good Night'.
- B. When we do any mistake, we must apologise and say 'Sorry' to them.
- C. We should speak rudely to them.
- D. We should help them to make their work easier.

ACHIEVERS SECTION

31 Rearrange the following letters to find the name of a natural disaster that refers to a destructive spinning strong wind.

- A. NUTMIAS
- B. NATODRO
- C. NAVLOCO
- D. DNELADLIS

32 How many means of communication are hidden in the word grid?

	L	P	A	S	L	C	A	M	D	C	E
	R	T	E	L	E	V	I	S	I	O	N
	R	A	D	I	O	G	R	A	S	P	I
	K	T	E	L	E	P	H	O	N	E	F
	I	N	E	W	S	P	A	P	E	R	A
	J	I	N	T	E	S	N	E	B	O	X

- A. 6
- B. 7
- C. 8
- D. 5

33 Select the correct statements.

1. The Olympic flag has a white background.
2. The Olympic Games were first held in 1856.
3. Olympic gold medals are made of pure gold.

A. 1 and 2 only B. 1 only C. 1 and 3 only D. 1, 2 and 3

34 Unscramble the words regarding parts of computer given in column-1 and select the **INCORRECT** match in column-2.

Column-1	Column-2
A. YEKROADB	– I am used for typing word.
B. ROTINOM	– I look like a TV.
C. SPU	– I help computer to play music.
D. YOJICSTK	– I help you to play games.

35 Identify the number.





- It is an odd number.
- It is less than 40 but more than 22.
- Its ones digit is greater than the tens digit.
- The sum of its digits is 10.

A. 55 B. 37 C. 23 D. 46

SPACE FOR ROUGH WORK

SPACE FOR ROUGH WORK



For latest updates & information, please like  our Facebook page (www.facebook.com/sofworld) or register on www.sofworld.org/subscribe-updates.html

For Level 1 and Level 2 preparation material / free sample papers, please log on to **www.mtg.in**



Head Office: Plot 99, Sector 44 Institutional area, Gurugram -122 003 (HR), India
Email: info@sofworld.org | Website: www.sofworld.org